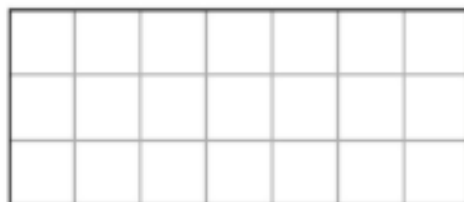





1 Vul aan en bereken.



hoogte: 3 cm

basis: 7 cm

De oppervlakte is: basis x hoogte = $1 \text{ cm}^2 \times 7 \times 3 = 21 \text{ cm}^2$




hoogte: 6 cm

De oppervlakte is: basis x hoogte

$1 \text{ cm}^2 \times 6 \times 6 = 36 \text{ cm}^2$


basis: 6 cm

2 Iets moeilijker!



De oppervlakte is: basis x hoogte

$1 \text{ cm}^2 \times 8 \times 3 = 24 \text{ cm}^2$



De oppervlakte is: basis x hoogte

$1 \text{ cm}^2 \times 5 \times 5 = 25 \text{ cm}^2$